

Dr Fog Presents

Mental Maths Test Week 3
and 4

- ***5 Seconds to answer each question.***

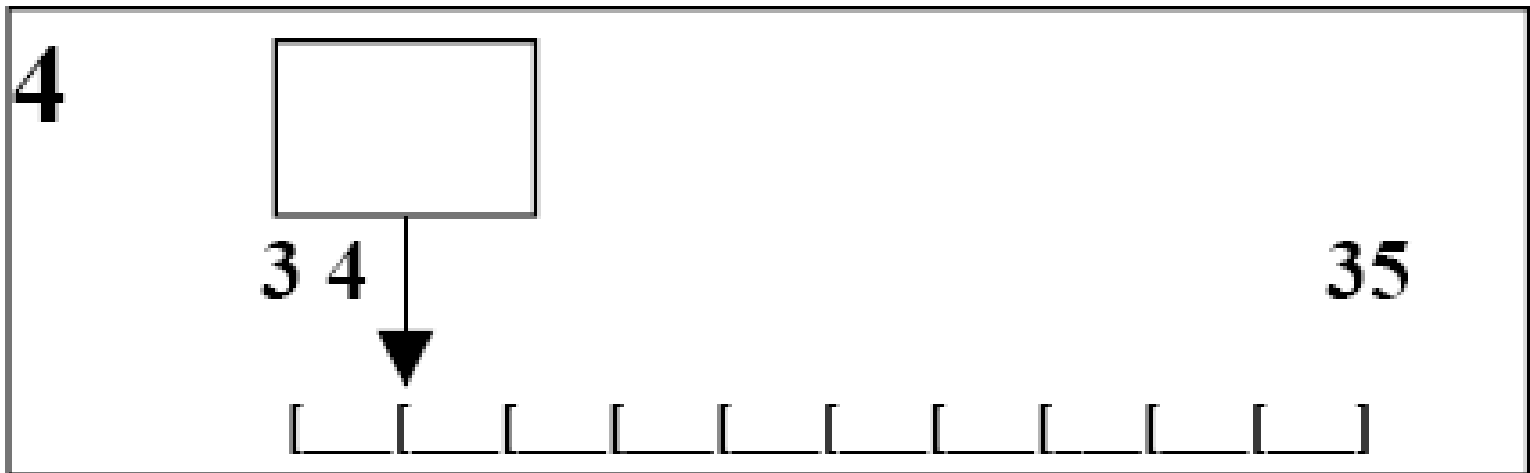
- 1. Write the number six thousand, two hundred and thirty in figures.

- 2. Look at the number sentence on your sheet. Write the correct value in the missing box.

$$\underline{\hspace{2cm}} + 11 = 56$$

- 3. Multiply eighty three by ten.

- 4. On your answer sheet is a scale. What is the number shown by the arrow?



- 5. It is 127 miles from London to Birmingham. Round this distance to the nearest ten miles.

- **10 Seconds to answer each question.**

- 6. Look at the numbers on your answer sheet. Write the number which is exactly divisible by five.

51 15 52 53

- 7. Write down the largest of the five numbers on your sheet.

- 706 192 607 167 617

- 8. What fraction of one pound is thirty pence?

- 9. What is 10% of £2?

- 10. What is fifty two subtract forty seven?

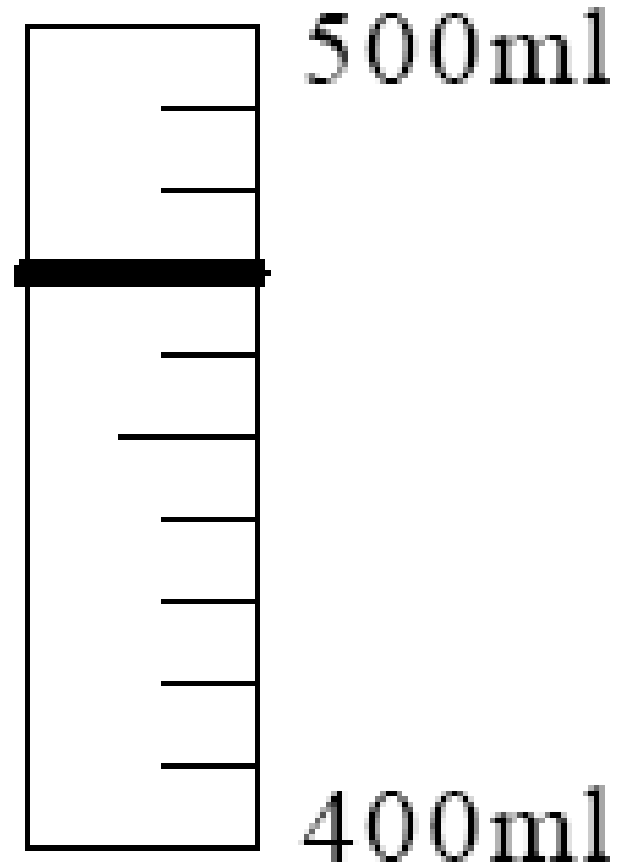
- 11. Look at the number sequence on your sheet. Which number is missing from the empty box?

24, 32, 40, , 56

- 12. What is 62 minus 7?

- 13. What is half of 86?

- 14. Look at the scale on your answer sheet. How much water is in the measuring cylinder?

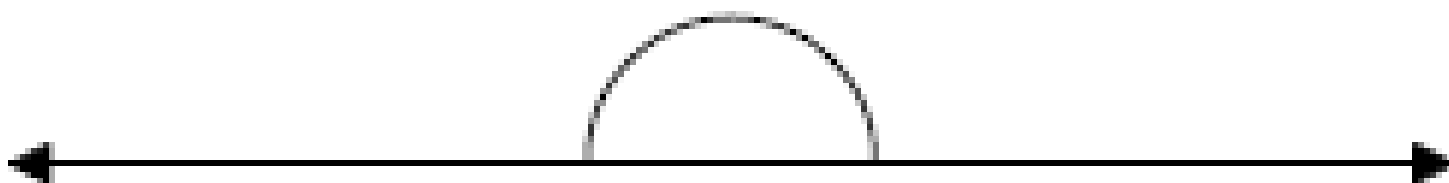


- 15. Cans of pop cost 25p. How much would six cans cost?

- ***15 Seconds to answer each question.***


- 16. How many seconds are there in 2 minutes?

- 17. Look at the drawing on your answer sheet. Estimate the size of the angle .



- 18. It costs 80p for a child to swim. How much does it cost for 6 children to swim?

- 19. Look at the rectangle on your answer sheet. What is the perimeter of the rectangle?



- 20. How many grams are equivalent to 4kg?

- Swap over books as the answers are on their way...

Answers

- 1 **6230**
- 2 **45**
- 3 **830**
- 4 **34.1**
- 5 **130**
- 6 **15**
- 7 **706**
- 8 **3/10 or 0.3**
- 9 **20p**
- 10 **5**
- 11 **48**
- 12 **55**
- 13 **43**
- 14 **470 ml**
- 15 **£1.50 Or 150**
- 16 **120 secs**
- 17 **180**
- 18 **£4.80 or 480p**
- 19 **14 cm**
- 20 **4000 g**

Where Can I Find More Resources Like This?

- You can now visit my teaching resource website at <http://www.DrFog.co.uk>
- You can [click here](#) to search for more of my teaching resources.
- [Click here](#) to visit my **YES** shop!